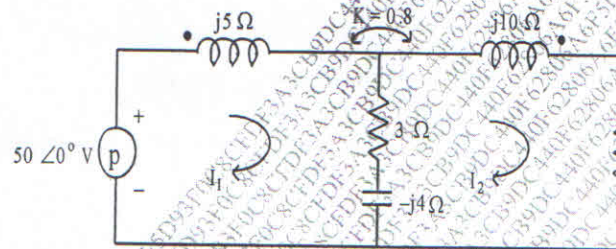


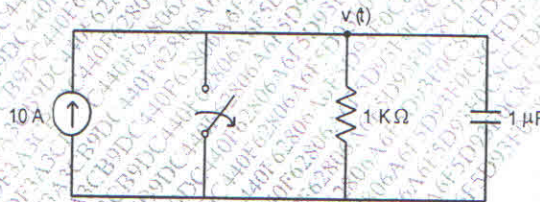
N.B.

- 1) Question No. 1 is Compulsory
- 2) Out of remaining questions, attempt any three
- 3) Assume suitable data if required
- 4) Figures to the right indicate full marks

- 1 (A) Draw equivalent circuit for given magnetically coupled circuit. 05



- (B) In the given network of Fig., switch is opened at $t = 0$. Solve for v and $\frac{dv}{dt}$ at $t = 0+$. 05

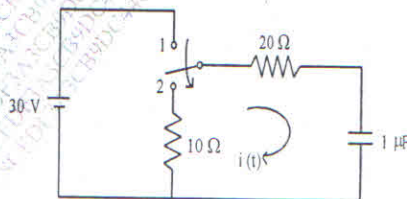


- (C) Prove that $AD - BC = 1$ for Transmission parameters. 05

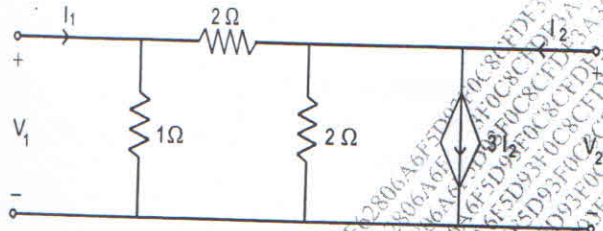
- (D) Define the following parameter of transmission lines: 05

- i) Input impedance
- ii) Characteristic Impedance
- iii) VSWR
- iv) Reflection Coefficient
- v) Transmission Coefficient

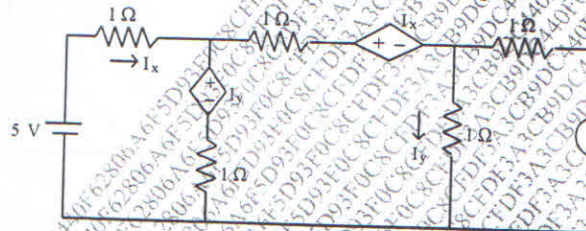
- 2 (A) In the network shown in Fig., switch is changed from position 1 to position 2 at $t = 0$, steady condition having reached before switching. Find the values of i , $\frac{di}{dt}$ and $\frac{d^2i}{dt^2}$ at $t = 0+$. 10



(B) For the network shown in Fig., find Z and Y-parameters. 10



3 (A) Find currents in the three meshes of network shown in Fig. 10



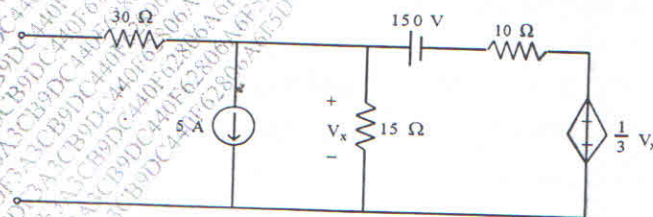
(B) The parameters of a transmission lines are $R = 65\Omega/\text{km}$, $L = 1.6\text{mH}/\text{km}$, $G = 2.25 \text{ mmho}/\text{km}$, $C = 0.1\mu\text{F}/\text{km}$. Find 10

- i) Characteristic Impedance
- ii) Propagation Constant
- iii) Attenuation Constant
- iv) Phase Constant at 1 kHz

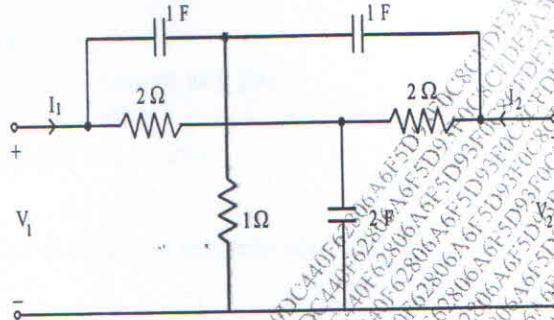
4 (A) Determine whether following functions are positive real 10

- i) $\frac{s^4 + 3s^3 + s^2 + s + 2}{s^3 + s^2 + s + 1}$
- ii) $\frac{s(s+3)(s+5)}{(s+1)(s+4)}$

(B) Obtain Thevenin equivalent network of Fig. 10



- 5 (A) Find Y-parameters for the network shown in Fig. 10

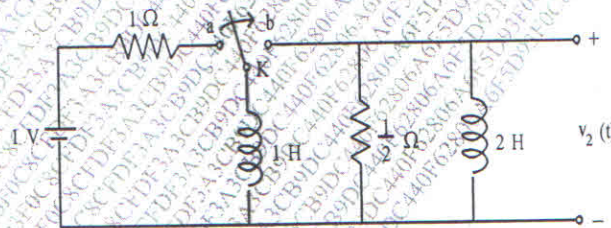


- (B) Realize the following functions in Foster II and Cauer I form 10

$$Z(s) = \frac{2(s^2 + 1)(s^2 + 9)}{s(s^2 + 4)}$$

- 6 (A) A transmission line has a characteristics impedance of 50 ohm and terminate in a load $Z_L = 25 + j50$ ohm. Use smith chart and Find VSWR and Reflection coefficient at the load. 10

- (B) In the network of Fig. switch is in position 'a' for a long time. At $t = 0$ switch is moved from a to b. Find $v_2(t)$. Assume that the initial current in 2 H inductor is zero. 10



- N.B.** (1) Question No. 1 is **Compulsory**
 (2) Out of remaining questions, attempt **any three**
 (3) **Assume** suitable data if required
 (4) Figures to the right indicate **full marks**
- Q.1** (a) State and prove De Morgan's Theorems [5]
 (b) Compare Combinational and sequential logic Circuits [5]
 (c) Define Propagation delay, Power Dissipation, Fan Out, Fan in for TTL family [5]
 (d) Explain Programmable Logic Array [5]
- Q.2** (a) Prove that NAND and NOR Gates are universal Gates [10]
 (b) Design a two-bit digital comparator and implement using Gates [10]
- Q.3** (a) Simplify the logical expressions using Boolean Laws and implement using Gates [10]
 $Y_1 = (A + C)(A + D)(B + C)(B + D)$, $Y_2 = (AB + C)(AB + D)$
 (b) Implement the given function using 8:1 Multiplexer [10]
 $F(A, B, C, D) = \sum m(0, 1, 2, 3, 4, 5, 6, 8, 9, 10, 12, 13, 15)$
- Q.4** (a) Explain the working of universal shift register [10]
 (b) Write a VHDE program to design a 4:1 Mux [10]
- Q.5** (a) Minimize the following expression using Quine McClusky Technique [10]
 $F(A, B, C, D) = \sum m(1, 3, 7, 9, 10, 11, 13, 15)$
 (b) Convert JK FF to D FF and T FF to D FF [10]
- Q.6** (a) Design a 3-bit asynchronous counter using JK FF. Draw neat timing diagram [10]
 (b) Write a note on CPLDs [10]

S.E. BTRX/EXTC - Applied Mathematics - III

CBGS

Q.P. Code : 13607

16/05/2018

(3 Hours)

[Total marks : 80]

- Note :-
- 1) Question number 1 is compulsory.
 - 2) Attempt any three questions from the remaining five questions.
 - 3) Figures to the right indicate full marks.

- Q.1
- a) Find the Laplace transform of $\cos t \cos 2t \cos 3t$. 05
 - b) Construct an analytic function whose real part is $e^x \cos y$. 05
 - c) Find the directional derivative of $\phi = x^2 + y^2 + z^2$ at point $A(1, -2, 1)$ in the direction of AB where B is $(2, 6, -1)$. 05
 - d) Expand $f(x) = lx - x^2$, $0 < x < l$ in a half-range sine-series. 05
- Q.2
- a) Find the angle between the normals to the surface $xy = z^2$ at the points $(1, 4, 2)$, $(-3, -3, 3)$. 06
 - b) Find the Fourier series for 06

$$f(x) = \begin{cases} -c & -a < x < 0 \\ c & 0 < x < a \end{cases}$$
 - c) Find the inverse Laplace transform of 08
 (i) $\frac{4s + 12}{s^2 + 8s + 12}$
 (ii) $\log\left(\frac{s^2 + a^2}{\sqrt{s + b}}\right)$
- Q.3
- a) State true or false with proper justification "There does not exist an analytic function whose real part is $x^3 - 3x^2y - y^3$ ". 06
 - b) Prove that $\int_{5/2}^{\pi} f(x) dx = \sqrt{\frac{2}{\pi x}} \left(\frac{3-x^2}{x^2} \sin x - \frac{3}{x} \cos x \right)$. 06
 - c) Expand $f(x) = 4 - x^2$ in the interval $(0, 2)$. 08
- Q.4
- a) Use Gauss's Divergence theorem to evaluate $\iint_S \vec{N} \cdot \vec{F} dS$ where $\vec{F} = 4x\vec{i} + 3y\vec{j} - 2z\vec{k}$ and S is the surface bounded by $x = 0, y = 0, z = 0$ and $2x + 2y + z = 4$. 06

TURN OVER

- b) Prove that $\int x^3 \cdot J_0(x) dx = x^3 \cdot J_1(x) - 2x^2 \cdot J_2(x)$. 06
- c) Solve using Laplace transform $\frac{dy}{dt} + 3y = 2 + e^{-t}$ with $y(0) = 1$. 08

Q. 5 a) Find Laplace transform of $(1 + 2t - 3t^2 + 4t^3)H(t - 2)$ where $H(t - 2) = \begin{cases} 0, & t < 2 \\ 1, & t \geq 2 \end{cases}$ 06

- b) Prove that $2J_0''(x) = J_2(x) - J_0(x)$. 06
- c) Obtain complex form of Fourier Series for $f(x) = e^{ax}$ in $(-\pi, \pi)$ where a is not an integer. Hence deduce that when a is a constant other than an integer 08

$$\sin ax = \frac{\sin \pi a}{i\pi} \sum \frac{(-1)^n n}{(a^2 - n^2)} e^{inx}$$

Q. 6 a) Using Green's theorem evaluate 06

$$\oint_C (e^{x^2} - xy) dx - (y^2 - ax) dy$$

where C is the circle $x^2 + y^2 = a^2$.

b) Express the function $f(x) = \begin{cases} 1 & \text{for } |x| < 1 \\ 0 & \text{for } |x| > 1 \end{cases}$ as a Fourier Integral. 06

c) Under the transformation $w = (1 + i)z + (2 - i)$, find the region in the w -plane into which the rectangular region bounded by $x = 0, y = 0, x = 1, y = 2$ in the z -plane is mapped. 08

xxx xxx

Max. Marks:80

Duration: 3hrs

NB:

- (1) Question No.1 is compulsory.
- (2) Answer any **three** from remaining questions.
- (3) **Figures** to the right indicate full marks.
- (4) Assume suitable data if required.

Q.1 Attempt any four

- a Give the equation for the current in semiconductor diode. With the help of this equation explain in detail the V-I characteristics of a semiconductor diode. 5
- b Explain effect of temperature on JFET and derive equation for zero temperature drift. 5
- c For the circuit shown in fig 1 determine small signal hybrid pi parameters of transistor. 5

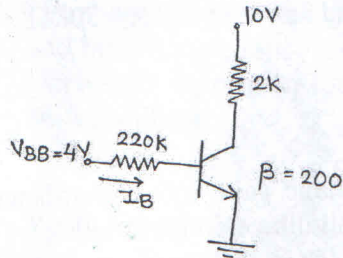


Fig.1

- d Design clipper circuit for the output shown in figure.2 Assume diode is ideal.

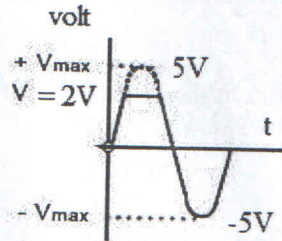


Fig.2

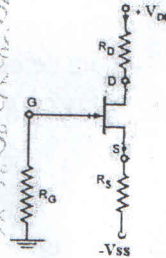


Fig.3

- e For the FET shown in figure.3 the drain current equation is $I_{DQ} = 9 \left(1 + \frac{V_{GSQ}}{3}\right)^2$ mA. 5
 Determine I_{DQ} , V_{GSQ} , V_{DSQ} , V_D , $V_{DD}=18V$, $R_D=2.2k\Omega$, $R_S=1.2K\Omega$, $-V_{SS}=-9V$ and $R_G=1M\Omega$.

Q.2

- a For the circuit shown in Fig.4 determine the V_{ECQ} , I_{CQ} , V_C , and V_E .

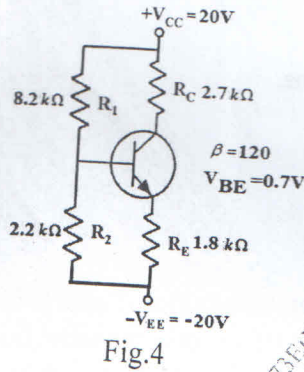


Fig.4

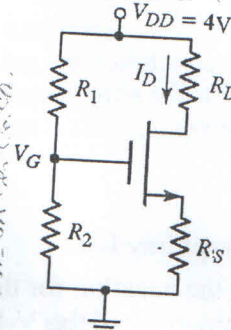


Fig.5

- b Design the circuit shown in Fig.5 such that $V_{GS} = 0.50V$ and $V_{DS} = 2.5V$. The transistor parameters are: $V_{TN} = 0.24V$, $K_n = 1.1mA/V^2$, and $\lambda = 0$. Let $R_1 + R_2 = 50k\Omega$.

Q.3

- a Analyze and derive the expression for the voltage gain, input impedance and output impedance for common collector amplifier with voltage divider biasing. 10
- b For the amplifier shown in Fig.6 analyze and determine: 10
- Small-signal voltage gain.
 - Input and output impedance.
- BJT and circuit parameters are: $\beta = 100$, $V_{BE} = 0.7V$, $R_1 = 56k\Omega$, $R_2 = 12.2k\Omega$, $R_E = 0.4k\Omega$, $R_C = 2k\Omega$, $R_L = 10k\Omega$, $R_S = 0.5k\Omega$, $V_{CC} = 10V$

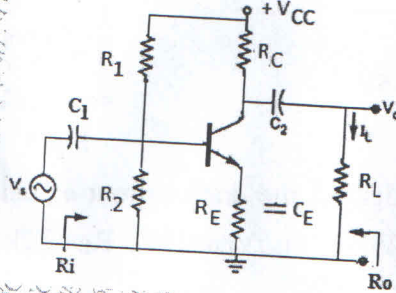


Fig.6

Q.4

- a Draw the structure of an N-channel Enhancement type MOSFET. Explain its working with the help of output drain characteristics and transfer characteristics. 10
- b For the MOSFET common source amplifier shown in fig.7 determine output voltage, input impedance and output impedance. Given: $V_{TN} = 1V, K_N = 0.5 \text{ mA/V}^2, \lambda = 0.01 \text{ V}^{-1}$ 10

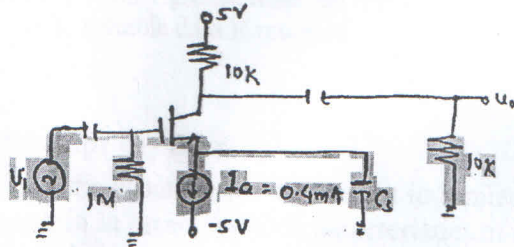


Fig.7

Q.5

- a Draw and explain energy band diagram of MOS capacitor in accumulation, depletion and inversion region. 10
- b Derive the expression for frequency of oscillation for a transistorized (BJT) RC phase shift oscillator. 10

Q.6

Write a short note on following

- a Cristal oscillator and its application. 5
- b Schottkey Diode (Construction and operation and application) 5
- c Graphical analysis of BJT amplifier to determine parameters. 5
- d h-Parameter equivalent circuit for BJT. 5
